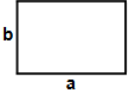
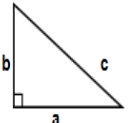





- 1)  Find perimeter of rectangle having sides $a = 80$ cm and $b = 51$ cm

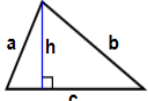
Answer: _____

- 2)  Find perimeter of triangle $a = 39$ cm, $b = 83$ cm, $c = 100$ cm

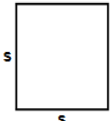
Answer: _____

- 3)  Find perimeter of square having each side (s) equals 11 in

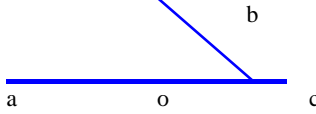
Answer: _____

- 4)  Find area of triangle $h = 31$ ft, $a = 32$ ft, $b = 51$ ft, $c = 90$ ft

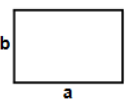
Answer: _____

- 5)  Find perimeter of square having each side (s) equals 52 m

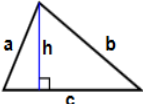
Answer: _____

- 6)  Measure angle boa


Answer: _____

- 7)  Find area of rectangle having sides $a = 70$ ft and $b = 56$ ft

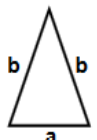
Answer: _____

- 8)  Find perimeter of triangle $h = 72$, $a = 73$ cm, $b = 97$ cm, $c = 98$ cm

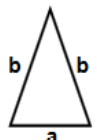
Answer: _____

- 9)  Find perimeter of square having each side (s) equals 27 ft


Answer: _____

- 10)  Find perimeter of triangle $a = 59$ in, $b = 92$ in

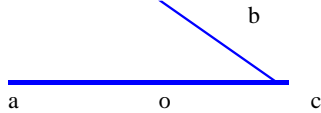
Answer: _____

- 11)  Find area of triangle $a = 27$ ft, $b = 47$ ft

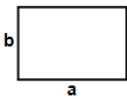
Answer: _____

- 12)  Find area of rectangle having sides $a = 98$ cm and $b = 91$ cm

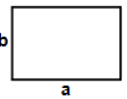
Answer: _____

- 13)  Measure angle boa

Answer: _____

- 14)  Find area of rectangle having sides $a = 68$ m and $b = 52$ m

Answer: _____

- 15)  Find area of rectangle having sides $a = 100$ in and $b = 100$ in


Answer: _____

Name: _____

June 04, 2021



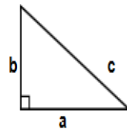
16)



Find perimeter of square having each side (s) equals 52 m

Answer: _____


17)



Find area of triangle
 $a = 84$ cm, $b = 85$ cm

Answer: _____

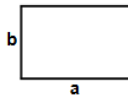
18)



Find perimeter of square having each side (s) equals 49 ft

Answer: _____

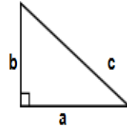
19)



Find area of rectangle having sides $a = 60$ cm and $b = 5$ cm

Answer: _____

20)



Find area of triangle
 $a = 75$ in, $b = 96$ in

Answer: _____

Total: ____ / 20

Name: _____

Sr: 04062021-2166

June 04, 2021



**11-PLUS
SATS
GCSES**



Answers:

- | | | | | | | |
|-------------|----------|------------|-----------------------|------------|------------|-----------|
| 1) 262cm | 2) 222cm | 3) 44in | 4) 790.5ft | 5) 208m | 6) 41 | 7) 3920ft |
| 8) 268cm | 9) 108ft | 10) 243in | 11) 315.66625967943ft | 12) 8918cm | 13) 35 | 14) 3536m |
| 15) 10000in | 16) 208m | 17) 3570cm | 18) 196ft | 19) 300cm | 20) 3600in | |